

2021

NAVNEET PRACTICE PAPERS & ACTIVITY SHEETS STANDARD X

Updated as per
Portion Omitted
from the
Syllabus for the
Year 2020-2021

Subjects :

English (HL)	Marathi (LL)	Hindi (Entire Lokbharati)	History & Political Science	Geography
Science & Technology (Part 1)	Science & Technology (Part 2)	Mathematics (Part-I)	Mathematics (Part-II)	

All Subjects included :

- Updated format of Question Paper/Activity Sheet
- Board's March 2020 Question Paper/Activity Sheet with Solution
- 5 Question Papers / Activity Sheets for Practice

Full Solution of
Practice Papers
through QR Code



GET
NAVNEET
DigiBook
FREE



2021

NAVNEET PRACTICE PAPERS & ACTIVITY SHEETS

Updated
as per the
portion omitted
from the syllabus
for the year
2020-21

Std. X

All Subjects :

English (HL)	मराठी (LL)	Hindi Entire (Lokbharati)	History and Political Science	Geography
Science & Technology (Part 1)	Science & Technology (Part 2)	Mathematics (Part-I)	Mathematics (Part-II)	

SALIENT FEATURES :

- A comprehensive kit for 2021 Board Examination
- Detailed notes of the omitted portion of syllabus for the academic year 2020-21 under '**Most Important**' at the beginning of each subject
- Updated **format** of Question Papers/Activity Sheets in each subject
- Board's March 2020 Question Paper/Activity Sheet in each subject with full solution
- Omitted portion of syllabus highlighted in solution to March 2020 Question Paper/Activity Sheet
- 5-5 Question Papers/Activity Sheets for practice prepared by expert and experienced authors keeping omitted syllabus in mind and their answers in QR code
- Answers in Practice papers of Mathematics (Part I & II) for cross-checking

Newly Added



Audio Feature on NAVNEET DigjBook
(Refer opposite page.)



Scan this QR code for correct answers
and compare your self-assessment.



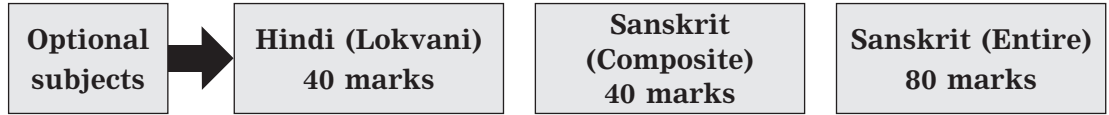
NAVNEET EDUCATION LIMITED

D0679

Price :
₹ 280.00

Updated as per the omitted portion in syllabus of language subjects viz. Hindi (लोकवाणी) and Sanskrit (Composite) or Sanskrit (Entire), the updated format of the Activity sheets and as per the Activity sheets of Board's March 2020.

नवनीत सराव कृतिपत्रिका STD. X



The book is available at all booksellers

Each subject includes :

- Detailed notes of the portion omitted for academic year 2020-21
- Updated format/pattern of Activity sheets
- Board's March 2020 Activity sheets with solutions
- 5 Activity sheets for practice
- **Answers to Activity sheets for Practice in QR code**

Plenty of practice ensures plenty of success!



NAVNEET EDUCATION LIMITED

Mumbai : Bhavani Shankar Road, Dadar (West), Mumbai – 400 028. (Tel. 6662 6565)

www.navneet.com • e-mail : publications@navneet.com

Ahmadabad : Navneet House, Gurukul Road, Memnagar, Ahmadabad – 380 052. (Tel. 6630 5000)

Nagpur : 63, Opp. Shivaji Science College, Congress Nagar, Nagpur – 440 012. (Tel. 242 1522)

Nashik : Nirman Inspire, 2nd Floor, Kanhere Wadi, Opp. Old CBS, Nashik – 422 001. (Tel. 259 6950)

Pune : Navneet Bhavan, 1302, Shukrawar Peth, Bajirao Road, Pune – 411 002. (Tel. 2443 1007)

© All rights reserved. No part of this book may be copied, adapted, abridged or translated, stored in any retrieval system, computer system, photographic or other system or transmitted in any form or by any means without a prior written permission of the copyright holders, M/s. Navneet Education Limited. Any breach will entail legal action and prosecution without further notice.

Published by Navneet Education Limited, Dantali, Gujarat.
Printed by Navneet Education Limited, Dantali, Gujarat.

2121
CTP
Rev. (25-12-20)

PREFACE

The world is going through an unforeseen situation of Covid-19 that has never been experienced before. Even in such a situation, it is a matter of pride that the principals, teachers, students and their parents from across the state of Maharashtra are giving top priority to the Board exams of Std. X by continuing with their efforts in teaching and learning with the help of technology. As the leading educational publisher, we too, are committed to contribute in this noble deed of imparting knowledge. We are hence delighted to publish the latest '**Navneet Practice Papers and Activity Sheets (All subjects) : Std. X**' book for the Board examination 2021 as per the updated format.

Given the limited timespan of teaching and learning due to the Covid-19 situation, the Board has omitted some portions of the syllabus from the evaluation i.e. examination in each subject for the academic year 2020-21. An important feature of the book '**Navneet Practice Papers and Activity Sheets**' is that it has been prepared precisely by keeping in mind this omitted portion from the syllabus.

In this book, the detailed information about the above mentioned omitted portions has been given for easy reference in a box labelled as '**Most important**' at the beginning of each subject. This will enable the students to know exactly which portion they need to study for the examination.

The book includes updated format of the Board's Question papers/Activity sheets with explanation and guidance. This will ensure that the students will have no doubts about the format of the question papers/activity sheets.

Board's March 2020 Question papers/Activity sheets have been provided along with full solutions and marking scheme for complete guidance. In addition to providing answers to the Question papers/Activity sheets, the questions and answers from the omitted syllabus have also been highlighted with special notes, which will help the students know that the questions on these omitted portion will not appear in the 2021 examination. At the same time the students will understand what questions could be asked in the related question type and how to write their answers. The solutions to the Board's Question paper/Activity sheets have been purposely given on the specimen answer sheets to give the students complete understanding of how to write the answers in an ideal manner.

The '**Navneet Practice Papers and Activity Sheets**' book consists of 5 Question papers/Activity sheets of each subject for practice, too. The practice Question papers/Activity sheets have been prepared meticulously by the expert and experienced team of authors of Navneet keeping the omitted portion in mind. In doing so, we have made sure that all the possible question types in the textbook and 'updated format' are incorporated in the book, for activities or questions can be asked in many different ways for a particular question in the Activity sheets. The book also provides answers to the questions in Practice papers of Mathematics (Part-I) & (Part-II) for cross-checking.

In a nutshell, the '**Navneet Practice Papers and Activity Sheets**' book will be extremely beneficial for the students to prepare and practise thoroughly for their Board examinations. We are confident that with this practice, the students will get brilliant success in their examination.

Navneet wishes all the students of Std. X a spectacular success ahead!

- The Publishers

CONTENTS

Page No.

★ **Section 1 : ENGLISH (HL)**

Omitted Syllabus and Updated Format of Board's Activity Sheet	...	5 to 12
Board's Activity Sheet (March 2020) (With Full Solution & Marking Scheme)	...	13 to 43
Activity Sheets For Practice 1 to 5	...	44 to 88

★ **Section 2 : Marathi (LL)**

वगळलेला अभ्यासक्रम व बोर्डाच्या कृतिपत्रिकेचा अद्ययावत आराखडा	...	89 to 94
Board's Activity Sheet (March 2020) (With Full Solution & Marking Scheme)	...	95 to 119
Activity Sheets For Practice 1 to 5	...	120 to 155

★ **Section 3 : Hindi Entire (Lokbharati)**

हटाए गए पाठ्यक्रम और बोर्ड की कृतिपत्रिका का अद्यतन प्रारूप	...	156 to 160
बोर्ड की कृतिपत्रिका (मार्च 2020) (आदर्श उत्तरों एवं अंक वितरण योजना सहित)	...	161 to 188
अभ्यास के लिए कृतिपत्रिका 1 से 5	...	189 to 233

★ **Section 4 : History and Political Science**

Omitted Syllabus and Updated Format of Board's Activity Sheet	...	234 to 236
Board's Activity Sheet (March 2020) (With Full Solution & Marking Scheme)	...	237 to 257
Activity Sheets For Practice 1 to 5	...	258 to 282

★ **Section 5 : Geography**

Omitted Syllabus and Updated Format of Board's Question Paper	...	283 & 284
Model Question Paper (With Full Solution & Marking Scheme)	...	285 to 298
Question Papers For Practice 1 to 5	...	299 to 320

★ **Section 6 : Science & Technology (Part 1)**

Omitted Syllabus and Updated Format of Board's Activity Sheet	...	321 & 323
Board's Activity Sheet (March 2020) (With Full Solution & Marking Scheme)	...	324 to 338
Activity Sheets For Practice 1 to 5	...	339 to 358

★ **Section 7 : Science & Technology (Part 2)**

Omitted Syllabus and Updated Format of Board's Activity Sheet	...	359 to 361
Board's Activity Sheet (March 2020) (With Full Solution & Marking Scheme)	...	362 to 377
Activity Sheets For Practice 1 to 5	...	378 to 401

★ **Section 8 : Mathematics (Part – I)**

Omitted Syllabus and Updated Format of Board's Question Paper	...	402 to 404
Board's Question Paper (March 2020) (With Full Solution & Marking Scheme)	...	405 to 423
Question Papers For Practice 1 to 5	...	424 to 443
Question Papers 1 to 5 (Answers)	...	444 to 447

★ **Section 9 : Mathematics (Part – II)**

Omitted Syllabus and Updated Format of Board's Question Paper	...	448 to 450
Board's Question Paper (March 2020) (With Full Solution & Marking Scheme)	...	451 to 472
Question Papers For Practice 1 to 5	...	473 to 497
Question Papers 1 to 5 (Answers)	...	498 to 500

★ **Chart of Marks obtained at a glance**

... **Cover 3**

Section 5 : Geography

Most Important

Note : No lesson of Geography has been completely omitted from the assessment for the academic year 2020-2021. However, from each lesson, some of the following questions are mentioned for the self-study by the board.

- Discuss • Information related to diagram • Give it a try • Try this • Can you tell?
- Use your brain power! • Make friends with maps ! • Do you know? • Find out.

As per the instructions given by the board, above mentioned portion is kept for self-study and internal evaluation only.

- Refer to the details given on Board's Website for the portion deleted.

All question papers for practice given in this book have been framed by taking into account the above instructions given by the board.

Updated Format of Board's Question Paper (With Guidance and Explanation)

Q. 1. Choose the correct options and rewrite the sentences :

4

- Note :** (1) In this, 4 statements with four options each will be asked.
(2) Entire statement to be written choosing correct option. Option to be underlined.
(3) These questions can also be asked instead of above question : (i) Identify the correlation and make a chain (ii) Identify the correct group.

Q. 2. Match the correct pairs :

4

- Note :** (1) In this 4 items will be given in 'A' column with 6 options in 'B' column.
(2) To write the correct option against each item.
(3) These questions can also be asked instead of above question : (i) Identify the odd man out (ii) Arrange the sentence in correct sequence (iii) Complete the series
(iv) Identify the incorrect / wrong pair.

Q. 3. Answer in one sentence : (*Any four*)

4

- Note :** (1) In this, five questions will be asked. Any four to be attempted.
(2) Any of these question types will be asked :
(i) Answer in one sentence
(ii) Name the following
(iii) Say the sentences are right or wrong
(iv) Identify the type on the basis of statement
(v) Differentiate between
(vi) Short notes.

Q. 4. (A) Mark the following in the outline map.

Write the names and give index : (Any four)

4

Note : (1) An outline map of India/Brazil will be given.
(2) Students will have to fill any 4 out of 6 details.
(3) Index to be given.

Q. 4. (B) Observe the map and answer the following questions : (Any four)

4

Note : (1) A map of India / Brazil with questions based on the same will be given.
(2) Students will have to answer any 4 out of 5.

Q. 5. Give geographical reasons : (Any two)

6

Note : (1) Four statements will be given.
(2) Students will have to write geographical reasons for any 2 out of 4.

Q. 6. (A) With the help of given statistical data, prepare a graph and answer the following questions :

6

OR

Q. 6. (B) Observe the graph and answer the questions given below :

6

Note : (1) For Q. 6. (A), students will have to prepare a graph with the help of given statistical data and answer three graph based questions **OR** For Q. 6. (B), students will have to observe the given graph and answer six graph based questions.
(2) Students will have to write either (A) **OR** (B).

Q. 7. Answer the following in detail : (Any two)

8

Note : (1) Any of these question types will be asked : (i) Answer in detail (ii) Explain.
(2) Student will have to write answers of any 2 out of 3 questions.

QUESTION PAPERS FOR PRACTICE

GEOGRAPHY QUESTION PAPER 1

Time : 2 Hours]

[Total Marks : 40

Note: (1) All questions/activities are compulsory.

(2) Figures to the right indicate full marks.

(3) For Q. No. 4. (A) use supplied outline map of India/Brazil and tie it to the main answer-book.

(4) For Q. No. 6. (A) use the graph paper supplied to you and attach that supplement to the main answer-book.

(5) Draw neat diagrams and sketches wherever necessary while writing answers.

(6) Use of stencil is allowed for drawing maps wherever necessary while writing answers.

(7) Answers should be written in black or blue pen only. Answers written in pencil will not be considered.

(8) Use of pencil or colour pencil is allowed for diagrams, graphs and map work.

Q. 1. Choose the correct options and rewrite the sentences :

4

(1) As the extent of Brazil is more, there is a variety in climatic conditions.

(i) equatorial

(ii) latitudinal and longitudinal

(iii) longitudinal

(iv) latitudinal

(2) Like Brazil, India too has

(i) high mountains

(ii) ancient plateau

(iii) west-flowing rivers

(iv) snow-capped mountains

(3) In India, salt is produced on a large scale in the state of

(i) Gujarat

(ii) Goa

(iii) Punjab

(iv) West Bengal

(4) Population wise, Brazil is largest country in the world.

(i) second

(ii) third

(iii) fourth

(iv) fifth

Q. 2. Match the correct pairs :

4

Column 'A'	Column 'B'
(1) Trans-Amazonian	(a) Railway station in India
(2) Northern Plains	(b) Sparsely populated state in Brazil
(3) Roraima	(c) Major Highways
(4) Manmad	(d) Nucleated settlements
	(e) Golden Quadrilateral
	(f) Linear settlements

Q. 3. Answer in one sentence each : (Any four)

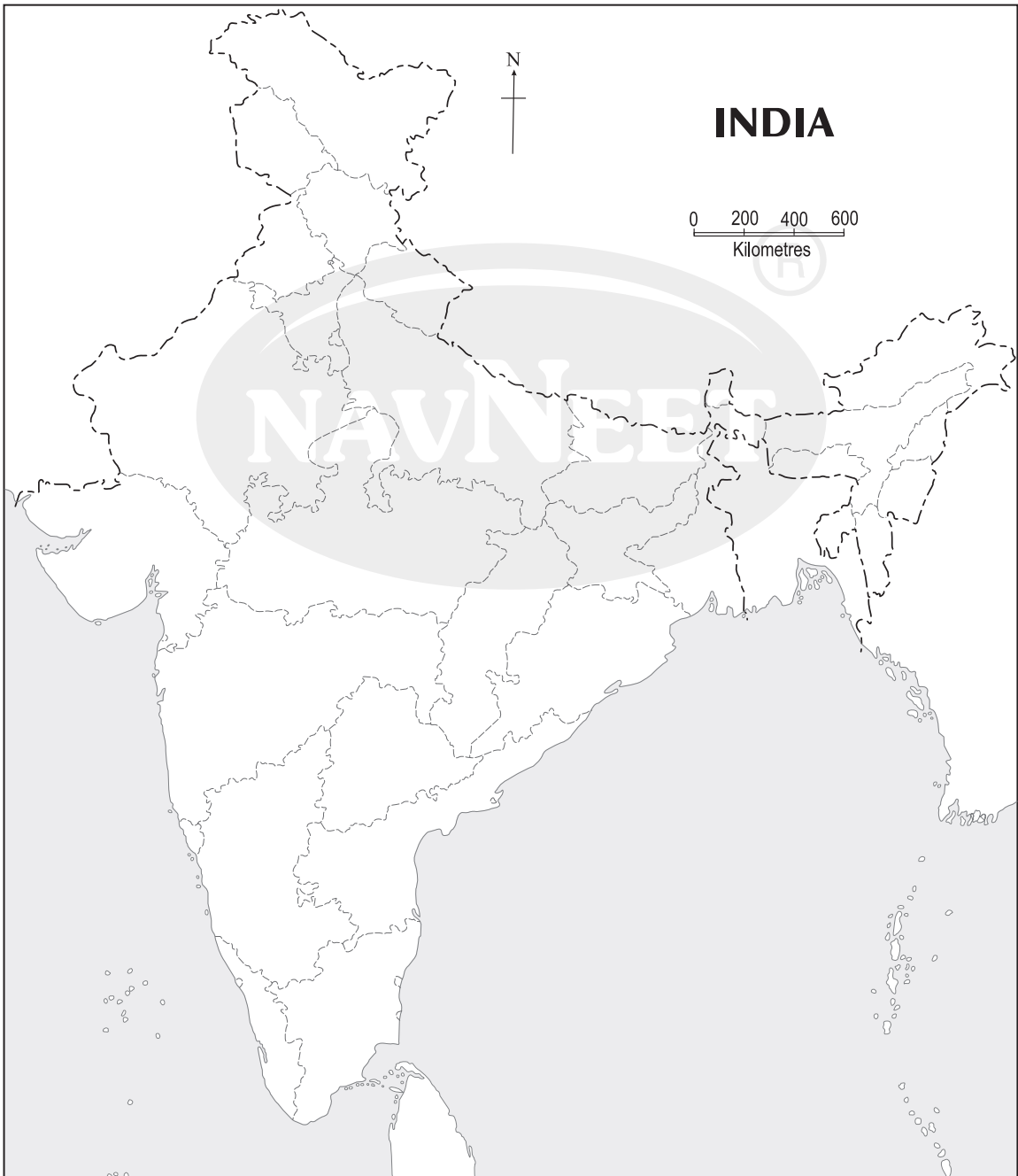
4

- (1) Which is the highest peak in Brazil?
- (2) What is sex ratio?
- (3) Which rivers meet near Manaus in Brazil?
- (4) Name the sectors of Brazil in which Indian companies have invested money.
- (5) Which type of information of a field can be collected by field visit?

Q. 4. (A) Mark the following in the outline map of India. Write the names and give index : (Any four)

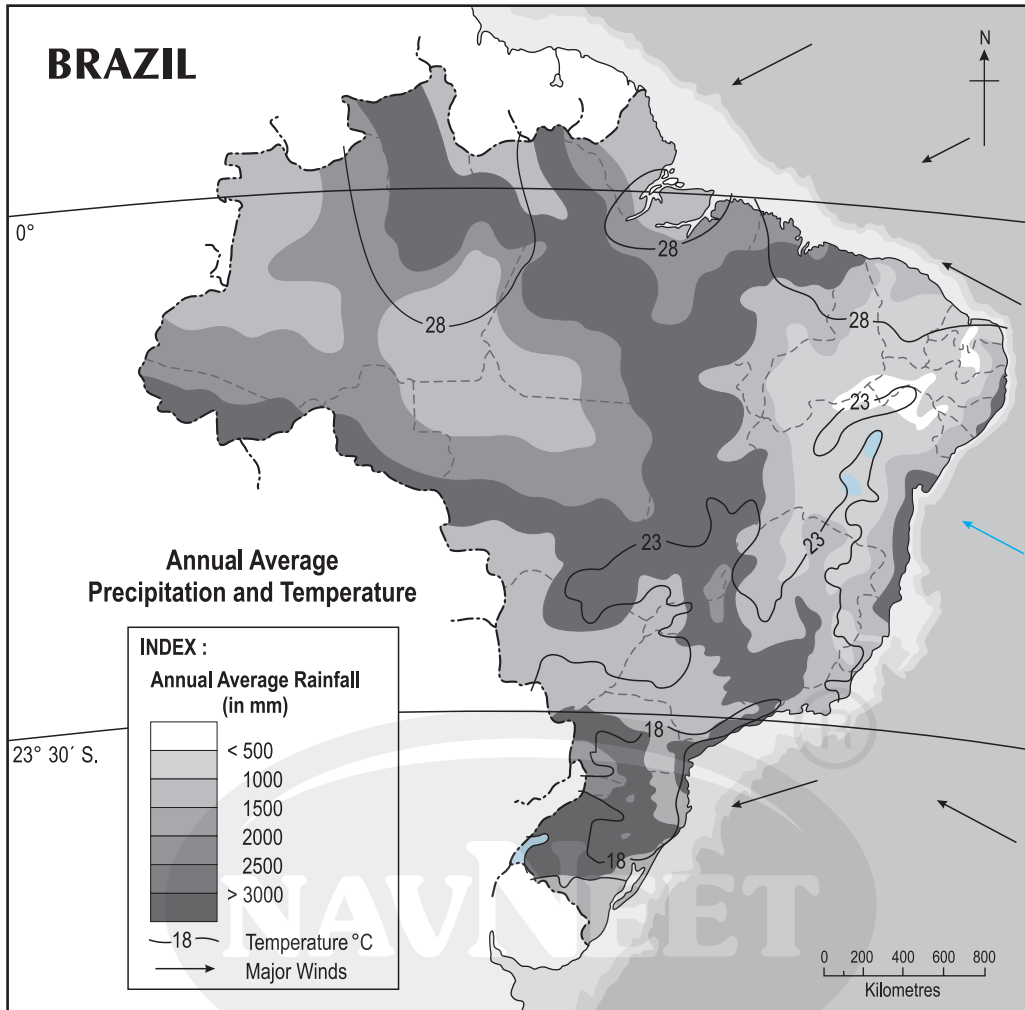
4

- | | |
|---|-----------------|
| (1) Tropic of Cancer | (2) Thar Desert |
| (3) State of Kerala having high density of population | (4) Sikkim |
| (5) Capital of India | (6) Ladakh. |



Q. 4. (B) Observe the map of Brazil and answer the following questions :

(Any four) 4



Questions :

- (1) In which area does it rain more in Brazil?
- (2) From which directions are the winds flowing towards Brazil?
- (3) What could be the obstruction in the way of these winds?
- (4) In which part of Brazil are the average temperatures low?
- (5) In which region do you find a higher temperature?

Q. 5. Give geographical reasons : (Any two)

6

- (1) Why is India looked upon as a young country?
- (2) Like India, there is need of conservation of forests in Brazil too.
- (3) Population density is high in Ganga plains.
- (4) There are no west-flowing rivers in Brazil.

Q. 6. (A) Prepare a multiple bar graph on the basis of the given information and answer the following questions :

6

India and Brazil – Urban Population (%)

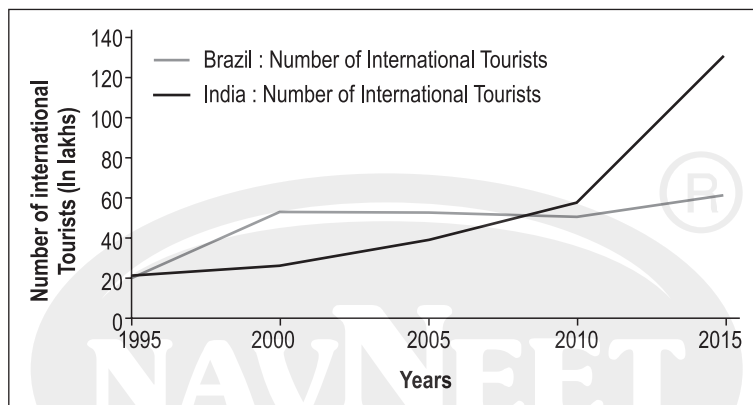
Country/Year	2015	2016	2017
India	32.1	32.5	32.8
Brazil	84.7	84.9	85.1

Questions :

- (1) What is the percentage of urban population in India in 2017?
- (2) In which country is the percentage of urban population higher?
- (3) What does the trend in urban population in both the countries indicate?

OR

Q. 6. (B) Observe the following graph and answer the questions given below :



Questions :

- (1) Which country attracted more international tourists in the year 1995?
- (2) In which country did more international tourists arrive in the year 2000?
- (3) In which year can an increase be seen in the number of international tourists in India?
- (4) What was the number of international tourists in the year 2015 in both the countries?
- (5) In which period can decrease be seen in the number of international tourists in Brazil?
- (6) What could be the reason of increase in tourists in India after the year 2010?

Q. 7. Answer the following in detail : (Any two)

8

- (1) Why has mining not developed in the western part of Brazil?
- (2) How will you manage the litter during field visit?
- (3) What environmental issues are faced by Brazil and India?