

2021

NAVNEET PRACTICE PAPERS & ACTIVITY SHEETS STANDARD X

Updated as per
Portion Omitted
from the
Syllabus for the
Year 2020-2021

Subjects :

English (HL)	Marathi (LL)	Hindi (Entire Lokbharati)	History & Political Science	Geography
Science & Technology (Part 1)	Science & Technology (Part 2)	Mathematics (Part-I)	Mathematics (Part-II)	

All Subjects included :

- Updated format of Question Paper/Activity Sheet
- Board's March 2020 Question Paper/Activity Sheet with Solution
- 5 Question Papers / Activity Sheets for Practice

Full Solution of
Practice Papers
through QR Code



GET
NAVNEET
DigiBook
FREE



2021

NAVNEET PRACTICE PAPERS & ACTIVITY SHEETS

Updated
as per the
portion omitted
from the syllabus
for the year
2020-21

Std. X

All Subjects :

English (HL)	मराठी (LL)	Hindi Entire (Lokbharati)	History and Political Science	Geography
Science & Technology (Part 1)	Science & Technology (Part 2)	Mathematics (Part-I)	Mathematics (Part-II)	

SALIENT FEATURES :

- A comprehensive kit for 2021 Board Examination
- Detailed notes of the omitted portion of syllabus for the academic year 2020-21 under '**Most Important**' at the beginning of each subject
- Updated **format** of Question Papers/Activity Sheets in each subject
- Board's March 2020 Question Paper/Activity Sheet in each subject with full solution
- Omitted portion of syllabus highlighted in solution to March 2020 Question Paper/Activity Sheet
- 5-5 Question Papers/Activity Sheets for practice prepared by expert and experienced authors keeping omitted syllabus in mind and their answers in QR code
- Answers in Practice papers of Mathematics (Part I & II) for cross-checking

Newly Added



Audio Feature on NAVNEET DigjBook
(Refer opposite page.)



Scan this QR code for correct answers
and compare your self-assessment.



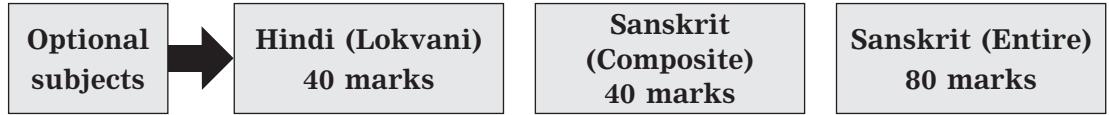
NAVNEET EDUCATION LIMITED

D0679

Price :
₹ 280.00

Updated as per the omitted portion in syllabus of language subjects viz. Hindi (लोकवाणी) and Sanskrit (Composite) or Sanskrit (Entire), the updated format of the Activity sheets and as per the Activity sheets of Board's March 2020.

नवनीत सराव कृतिपत्रिका STD. X



GET
**NAVNEET
DigiBook**
FREE

The book is
available at all
booksellers

Each subject includes :

- Detailed notes of the portion omitted for academic year 2020-21
- Updated format/pattern of Activity sheets
- Board's March 2020 Activity sheets with solutions
- 5 Activity sheets for practice
- **Answers to Activity sheets for Practice in QR code**

Plenty of practice ensures plenty of success!



NAVNEET EDUCATION LIMITED

Mumbai : Bhavani Shankar Road, Dadar (West), Mumbai – 400 028. (Tel. 6662 6565)

www.navneet.com • e-mail : publications@navneet.com

Ahmadabad : Navneet House, Gurukul Road, Memnagar, Ahmadabad – 380 052. (Tel. 6630 5000)

Nagpur : 63, Opp. Shivaji Science College, Congress Nagar, Nagpur – 440 012. (Tel. 242 1522)

Nashik : Nirman Inspire, 2nd Floor, Kanhere Wadi, Opp. Old CBS, Nashik – 422 001. (Tel. 259 6950)

Pune : Navneet Bhavan, 1302, Shukrawar Peth, Bajirao Road, Pune – 411 002. (Tel. 2443 1007)

© All rights reserved. No part of this book may be copied, adapted, abridged or translated, stored in any retrieval system, computer system, photographic or other system or transmitted in any form or by any means without a prior written permission of the copyright holders, M/s. Navneet Education Limited. Any breach will entail legal action and prosecution without further notice.

Published by Navneet Education Limited, Dantali, Gujarat.
Printed by Navneet Education Limited, Dantali, Gujarat.

2121
CTP
Rev. (25-12-20)

PREFACE

The world is going through an unforeseen situation of Covid-19 that has never been experienced before. Even in such a situation, it is a matter of pride that the principals, teachers, students and their parents from across the state of Maharashtra are giving top priority to the Board exams of Std. X by continuing with their efforts in teaching and learning with the help of technology. As the leading educational publisher, we too, are committed to contribute in this noble deed of imparting knowledge. We are hence delighted to publish the latest '**Navneet Practice Papers and Activity Sheets (All subjects) : Std. X**' book for the Board examination 2021 as per the updated format.

Given the limited timespan of teaching and learning due to the Covid-19 situation, the Board has omitted some portions of the syllabus from the evaluation i.e. examination in each subject for the academic year 2020-21. An important feature of the book '**Navneet Practice Papers and Activity Sheets**' is that it has been prepared precisely by keeping in mind this omitted portion from the syllabus.

In this book, the detailed information about the above mentioned omitted portions has been given for easy reference in a box labelled as '**Most important**' at the beginning of each subject. This will enable the students to know exactly which portion they need to study for the examination.

The book includes updated format of the Board's Question papers/Activity sheets with explanation and guidance. This will ensure that the students will have no doubts about the format of the question papers/activity sheets.

Board's March 2020 Question papers/Activity sheets have been provided along with full solutions and marking scheme for complete guidance. In addition to providing answers to the Question papers/Activity sheets, the questions and answers from the omitted syllabus have also been highlighted with special notes, which will help the students know that the questions on these omitted portion will not appear in the 2021 examination. At the same time the students will understand what questions could be asked in the related question type and how to write their answers. The solutions to the Board's Question paper/Activity sheets have been purposely given on the specimen answer sheets to give the students complete understanding of how to write the answers in an ideal manner.

The '**Navneet Practice Papers and Activity Sheets**' book consists of 5 Question papers/Activity sheets of each subject for practice, too. The practice Question papers/Activity sheets have been prepared meticulously by the expert and experienced team of authors of Navneet keeping the omitted portion in mind. In doing so, we have made sure that all the possible question types in the textbook and 'updated format' are incorporated in the book, for activities or questions can be asked in many different ways for a particular question in the Activity sheets. The book also provides answers to the questions in Practice papers of Mathematics (Part-I) & (Part-II) for cross-checking.

In a nutshell, the '**Navneet Practice Papers and Activity Sheets**' book will be extremely beneficial for the students to prepare and practise thoroughly for their Board examinations. We are confident that with this practice, the students will get brilliant success in their examination.

Navneet wishes all the students of Std. X a spectacular success ahead!

- The Publishers

CONTENTS

Page No.

★ **Section 1 : ENGLISH (HL)**

Omitted Syllabus and Updated Format of Board's Activity Sheet	...	5 to 12
Board's Activity Sheet (March 2020) (With Full Solution & Marking Scheme)	...	13 to 43
Activity Sheets For Practice 1 to 5	...	44 to 88

★ **Section 2 : Marathi (LL)**

वगळलेला अभ्यासक्रम व बोर्डाच्या कृतिपत्रिकेचा अद्ययावत आराखडा	...	89 to 94
Board's Activity Sheet (March 2020) (With Full Solution & Marking Scheme)	...	95 to 119
Activity Sheets For Practice 1 to 5	...	120 to 155

★ **Section 3 : Hindi Entire (Lokbharati)**

हटाए गए पाठ्यक्रम और बोर्ड की कृतिपत्रिका का अद्यतन प्रारूप	...	156 to 160
बोर्ड की कृतिपत्रिका (मार्च 2020) (आदर्श उत्तरों एवं अंक वितरण योजना सहित)	...	161 to 188
अभ्यास के लिए कृतिपत्रिका 1 से 5	...	189 to 233

★ **Section 4 : History and Political Science**

Omitted Syllabus and Updated Format of Board's Activity Sheet	...	234 to 236
Board's Activity Sheet (March 2020) (With Full Solution & Marking Scheme)	...	237 to 257
Activity Sheets For Practice 1 to 5	...	258 to 282

★ **Section 5 : Geography**

Omitted Syllabus and Updated Format of Board's Question Paper	...	283 & 284
Model Question Paper (With Full Solution & Marking Scheme)	...	285 to 298
Question Papers For Practice 1 to 5	...	299 to 320

★ **Section 6 : Science & Technology (Part 1)**

Omitted Syllabus and Updated Format of Board's Activity Sheet	...	321 & 323
Board's Activity Sheet (March 2020) (With Full Solution & Marking Scheme)	...	324 to 338
Activity Sheets For Practice 1 to 5	...	339 to 358

★ **Section 7 : Science & Technology (Part 2)**

Omitted Syllabus and Updated Format of Board's Activity Sheet	...	359 to 361
Board's Activity Sheet (March 2020) (With Full Solution & Marking Scheme)	...	362 to 377
Activity Sheets For Practice 1 to 5	...	378 to 401

★ **Section 8 : Mathematics (Part - I)**

Omitted Syllabus and Updated Format of Board's Question Paper	...	402 to 404
Board's Question Paper (March 2020) (With Full Solution & Marking Scheme)	...	405 to 423
Question Papers For Practice 1 to 5	...	424 to 443
Question Papers 1 to 5 (Answers)	...	444 to 447

★ **Section 9 : Mathematics (Part - II)**

Omitted Syllabus and Updated Format of Board's Question Paper	...	448 to 450
Board's Question Paper (March 2020) (With Full Solution & Marking Scheme)	...	451 to 472
Question Papers For Practice 1 to 5	...	473 to 497
Question Papers 1 to 5 (Answers)	...	498 to 500

★ **Chart of Marks obtained at a glance**

... Cover 3

Section 9 : Mathematics (Part – II)

Most Important

Note : Some portions from the syllabus of Mathematics (Part – II) have been omitted for the evaluation in exam to be held for the academic year 2020–21 by S.S.C. Board.

- The portions omitted from the syllabus are :

Chapter 1 : (Similarity)

Page 8	: Theorem of an angle bisector of a triangle (Rows 14 to 21).
Page 9	: Entire page.
Page 10	: Entire page.
Page 11	: Remember this Ex. (3) and (4).
Page 12	: Ex. (2) and Activity.
Page 13	: Activity. Practice Set 1.2 : Subquestions (1), (2), (3) of Ex. 1.
Pages 14 and 15	: Practice Set 1.2 : Ex. 3, 5, 6, 7, 8, 9, 11.
Pages 28 and 29	: Problem Set 1 : Ex. 8, 9, 10.

Chapter 2 : (Pythagoras Theorem)

Pages 40 to 42	: Entire pages
Page 43	: Practice Set 2.2
Page 44	: Problem Set 2 : Ex. 1. Subquestion (6)
Pages 45 and 46	: Problem Set 2 : Ex. 8, 9, 12, 17, 18

Chapter 3 : (Circle)

Page 75	: Theorem of angle between tangent and secant (Rows 5 to 23).
Pages 76 to 82	: Entire pages
Page 83	: Problem Set 3 : Ex. 1. Subquestion (7).
Pages 87 to 90	: Problem Set 3 : Ex. 13, 15, 16, 18, 22, 24.

Chapter 4 : (Geometric Construction)

No portion has been omitted.

Chapter 5 : (Coordinate Geometry)

Page 116	: Slope of a line. Activity I.
Pages 117 to 121	: Entire pages
Pages 122 and 123	: Ex. 6, 7, 8 of Practice Set 5.3. Problem Set 5 : Subquestion (4) of Ex. 1. Subquestions (1), (2), (3) of Ex. 2. Ex. 9, 10, 22.

Chapter 6 : (Trigonometry)

Pages 132 to 137 [Word problems are omitted]

Chapter 7 : (Mensuration)

Entire chapter is omitted.

No question will be asked from the omitted portion. However, students should study the omitted portion on their own because it may be useful for further study.

Questions asked in March 2020 Board Paper from this omitted portion are highlighted using screen.

These Practice Papers have been prepared keeping in mind the portion omitted from the syllabus.

Updated Format of Board's Question Paper
(With Guidance and Explanation)

Q. 1. (A) Four alternative answers are given for each of the following subquestions. Choose the correct alternative and write the letter of alphabet of that answer : 4

Remember :

- In this question, 4 multiple choice subquestions of 1 mark each will be asked. Four alternatives, for each subquestion, will be given. Choose and write the letter of the correct alternative (with brackets) against the question number.
- All the subquestions are compulsory.
- Method of solution is not expected.

Q. 1. (B) Solve the following subquestions : 4

Remember :

- In this question, 4 subquestions of 1 mark each will be asked.
- All subquestions are compulsory.

Q. 2. (A) Complete and write *any two* of the following activities : 4

Remember :

- In this question, 3 activities of 2 marks each will be given.
- Students should attempt any two of them.

Q. 2. (B) Solve *any four* of the following subquestions : 8

Remember :

- In this question, 5 subquestions of 2 marks each will be asked.
- Students should solve any four of them.
- Answers with solution are expected.

Q. 3. (A) Complete and write *any one* of the following activities : 3

Remember :

- In this question, 2 activities of 3 marks each will be given.
- Students should attempt any one of them.

Q. 3. (B) Solve *any two* of the following subquestions : 6

Remember :

- In this question, 4 subquestions of 3 marks each will be asked.
- Students should solve any two of them.
- Theorems may be asked in this question.
- Answers with solution are expected.

Q. 4. Solve *any two* of the following subquestions :

8

Remember :

- In this question, 3 subquestions of 4 marks each will be asked.
- Students should solve any two of them.
- These questions may be challenging.
- These questions will not be from the textbook, but based on the syllabus.
- Answers with solution are expected.

Q. 5. Solve *any one* of the following subquestions :

3

Remember :

- In this question, 2 subquestions of 3 marks each will be asked. Students should solve any one of them.
- Answers with solution are expected.
- These questions may be open ended questions.
- These questions will not be from the textbook, but based on the syllabus.



QUESTION PAPERS FOR PRACTICE

MATHEMATICS (PART – II)

QUESTION PAPER 1

Time : 2 Hours]

[Total Marks : 40

Note : (i) *All questions are compulsory.*

(ii) *Use of calculator is **not** allowed.*

(iii) *The numbers to the right of the questions indicate full marks.*

(iv) *In case of MCQ's [Q. No. **1(A)**], only the first attempt will be evaluated and will be given credit.*

(v) *For every MCQ, the correct alternative (A), (B), (C) or (D) in front of subquestion number is to be written as an answer.*

(vi) *Draw proper figures for answers wherever necessary.*

(vii) *The marks of construction should be clear and distinct. Do not erase them.*

(viii) *Diagram is essential for writing the proof of the theorem.*

Q. 1. (A) Four alternative answers are given for each of the following subquestions.

Choose the correct alternative and write the alphabet of that answer : 4

(i) In a right angled triangle, if the sum of the squares of the sides making a right angle is 169, then what is the length of the hypotenuse?

(A) 15 (B) 13 (C) 5 (D) 12

(ii) The distance between the point $(-6, 8)$ and the origin is

(A) 10 (B) 11 (C) 5 (D) 14

(iii) If $\frac{1 - \sin^2 A}{\cos^2 A} = \tan \theta$, then the value of θ is

(A) 60° (B) 45° (C) 90° (D) 30°

(iv) The areas of two similar triangles are 9 cm^2 and 16 cm^2 . The ratio of their corresponding heights is

(A) 9 : 16 (B) 3 : 4 (C) 4 : 3 (D) 16 : 9

Q. 1. (B) Solve the following subquestions :

4

(i) Two circles with radii 3.5 cm and 2.5 cm touch each other internally. Find the distance between their centres.

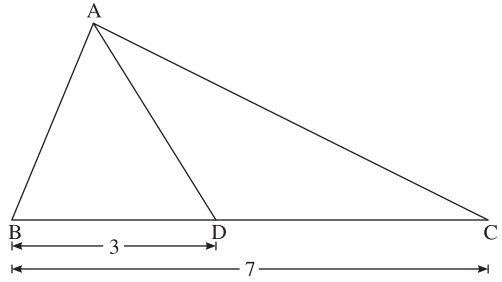
(ii) $P\left(\frac{a}{2}, 4\right)$ is the midpoint of seg AB joining the points $A(-6, 5)$ and $B(-2, 3)$.

Find the value of a .

(iii) In $\triangle ABC$, if $AB^2 = AC^2 + CB^2$, state with reason whether $\triangle ABC$ is a right angled triangle or not.

(iv) In the figure, $BC = 7$, $BD = 3$.

Write the ratio $\frac{A(\triangle ABD)}{A(\triangle ABC)}$.



Q. 2. (A) Complete and write any two of the following activities :

4

(i) Observe the figure and complete the following activity.

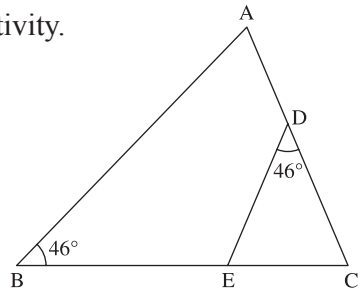
In $\triangle ABC$ and $\triangle EDC$,

$\angle ABC \cong \angle$... (Each measures 46°)

$\angle C \cong \angle C$... ()

$\therefore \triangle ABC \sim \triangle$

... (test for similarity)



(ii) Observe the given figure and complete the following activity to find the measure of an angle in a semicircle.

seg AC is the diameter.

$\therefore m(\text{arc AMC}) = 180^\circ$

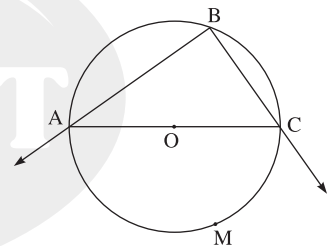
$\angle ABC = \frac{1}{2}m(\text{arc } \text{ })$

... [Inscribed angle theorem]

$\therefore \angle ABC = \frac{1}{2} \times$

$\therefore \angle ABC =$

\therefore angle inscribed in a semicircle is a



(iii) Complete the following activity to draw a tangent to a circle at a point on the circle :

Draw a circle of radius 4 cm and centre O



Take a point P on the circle and draw ray OP



Draw a perpendicular line to ray OP at point P

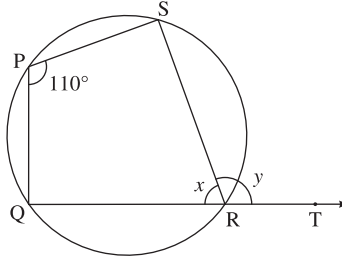


Name the perpendicular line as l ,
 l is the tangent at point P

Q. 2. (B) Solve any four of the following subquestions :

8

- (i) Identify, with reason, whether (24, 70, 74) is a Pythagorean triplet or not.
 (ii) $\square PQRS$ is cyclic and $Q-R-T$. If $\angle QPS = 110^\circ$, $\angle QRS = x$ and $\angle SRT = y$, then find the values of x and y .

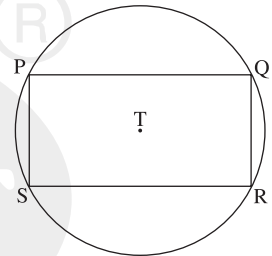


- (iii) Find the ratio in which the line segment joining the points A (3, 8) and B (-9, 3) is divided by the Y-axis.
 (iv) Draw a circle with centre O and radius 3 cm. Take a point P at a distance 5.7 cm from the centre. Draw tangents to the circle from point P.
 (v) $\triangle LMN \sim \triangle RST$, $LM = 3$, $MN = 4$, $ST = 12$, find RS.

Q. 3. (A) Complete and write any one of the following activities :

3

- (i) In the figure, a rectangle PQRS is inscribed in a circle with centre T. Complete the following activity to prove arc $PQ \cong$ arc SR , arc $SP \cong$ arc QR and arc $SPQ \cong$ arc PQR .



$\square PQRS$ is a rectangle.

\therefore chord $PQ \cong$ chord SR ... (Opposite sides of a rectangle)

\therefore arc $PQ \cong$ arc ... (Arcs corresponding to congruent chords)

chord $PS \cong$ chord QR ... (Opposite sides of a rectangle)

\therefore arc $SP \cong$ arc ... (Arcs corresponding to congruent chords)

\therefore measures of arcs SP and QR are equal.

Now, $m(\text{arc } SP) + \text{} = \text{} + m(\text{arc } QR)$

$\therefore m(\text{arc } SPQ) = \text{}$

\therefore arc $SPQ \cong \text{}$

- (ii) Complete the following activity to find the length of median AD.

Activity :

A(-1, 1), B(5, -3), C(3, 5)

Let $D(x_1, y_1)$

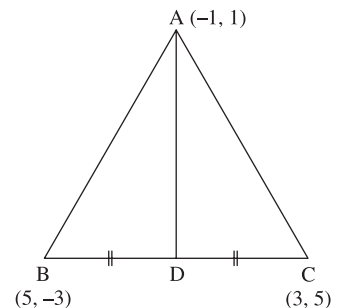
By midpoint formula,

$$x_1 = \frac{5+3}{2}$$

$$y_1 = \frac{-3+5}{2}$$

$$\therefore x_1 = \text{}$$

$$\therefore y_1 = \text{}$$



By distance formula,

$$AD = \sqrt{\left[4 - \boxed{}\right]^2 + (1 - 1)^2}$$

$$\therefore AD = \sqrt{\boxed{}^2 + 0^2}$$

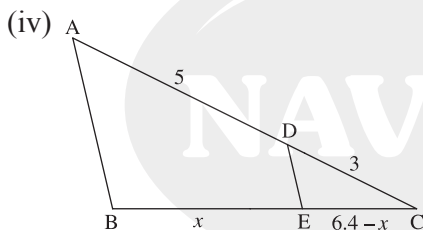
$$\therefore AD = \sqrt{\boxed{}}$$

$$\therefore AD = \boxed{}$$

Q. 3. (B) Solve any two of the following subquestions :

6

- (i) Prove : ‘In a right angled triangle, the perpendicular segment to the hypotenuse from the opposite vertex, is the geometric mean of the segments into which the hypotenuse is divided.’
- (ii) \square MRPN is cyclic, $\angle R = (5x - 13)^\circ$, $\angle N = (4x + 4)^\circ$. Find the measures of $\angle R$ and $\angle N$.
- (iii) $\triangle PSE \sim \triangle TSV$. In $\triangle PSE$, $PS = 4.4$ cm, $SE = 5.1$ cm, $PE = 5.5$ cm and $\frac{PS}{TS} = \frac{5}{3}$. Construct $\triangle PSE$ and $\triangle TSV$.



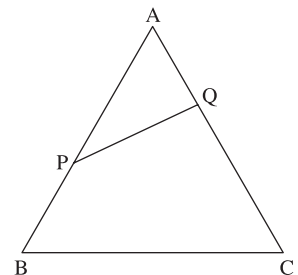
In the figure, A–D–C and B–E–C. seg DE \parallel side AB. If AD = 5, DC = 3, BC = 6.4, then find BE and EC.

Q. 4. Solve any two of the following subquestions :

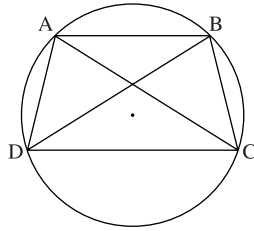
8

- (i) A line cuts two sides AB and AC of $\triangle ABC$ in points P and Q.

Prove : $\frac{A(\triangle APQ)}{A(\triangle ABC)} = \frac{AP \times AQ}{AB \times AC}$



(ii)



The diagonals of cyclic quadrilateral ABCD are congruent. Show that $AD = BC$ and $\text{seg } AB \parallel \text{seg } CD$.

(iii) $\triangle ABC$ is an equilateral triangle. Point P is on base BC such that $PC = \frac{1}{3}BC$.

If $AB = 12$ cm, find AP.

Q. 5. Solve any one of the following subquestions :

3

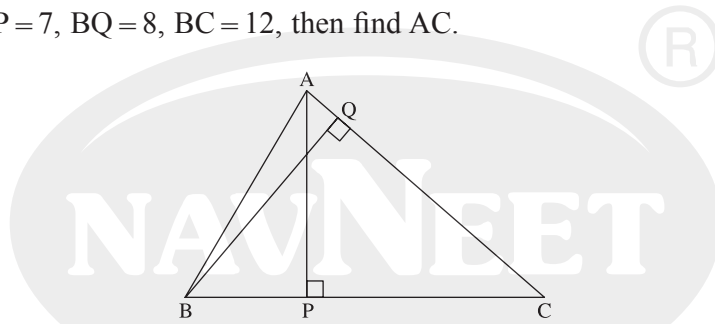
(i) In $\triangle ABC$, $AP \perp BC$,

$BQ \perp AC$, $B-P-C$ and $A-Q-C$, then

(1) Prove : $\triangle CPA \sim \triangle CQB$.

(2) Write the proportionality of the corresponding sides of $\triangle CPA$ and $\triangle CQB$.

(3) If $AP = 7$, $BQ = 8$, $BC = 12$, then find AC.



(ii) Prove : $\cot^2\theta - \tan^2\theta = \operatorname{cosec}^2\theta - \sec^2\theta$ by following the given steps.

(a) Consider LHS and write the square relation of $\cot^2\theta$ and $\tan^2\theta$.

(b) Simplify and prove it equal to RHS.

Question Paper 1 (Page 473)

Q. 1. (A) (i) (B) (ii) (A) (iii) (B) (iv) (B).

Q. 1. (B) (i) 1 cm (ii) The value of a is -8 .

(iii) $\triangle ABC$ is a right angled triangle, By converse of Pythagoras theorem.

(iv) $\frac{A(\triangle ABD)}{A(\triangle ABC)} = \frac{3}{7}$.

Q. 2. (A) (i) $\angle EDC$, Common angle, $\angle EDC$, AA

(ii) $\angle AMC$, 180° , 90° , right angle.

Q. 2. (B) (i) (24, 70, 74) is a Pythagorean triplet as the square of the largest number is equal to the sum of the squares of the other two numbers.

(ii) $x = 70^\circ$, $y = 110^\circ$ (iii) $1 : 3$ (v) $RS = 9$.

Q. 3. (A) (i) $\angle SR$, $\angle QR$, $m(\text{arc PQ})$, $m(\text{arc PQ})$, $m(\text{arc PQR})$, arc PQR

(ii) 4, 1, -1 , 5, 25, 5.

Q. 3. (B) (ii) $\angle R = 92^\circ$, $\angle N = 88^\circ$ (iv) $BE = 4$, $CE = 2.4$.

Q. 4. (iii) $AP = 4\sqrt{7}$ cm.

Q. 5. (i) $\frac{CP}{CQ} = \frac{PA}{QB} = \frac{CA}{CB}$, $AC = 10.5$.